



INDIAN SCHOOL AL WADI AL KABIR  
DEPARTMENT OF MATHEMATICS (2021-22)

TOPIC – MONEY



WORKSHEET -1

RESOURCE PERSON – Mrs. Savitha D'Souza

Name: \_\_\_\_\_

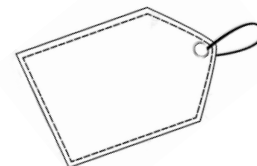

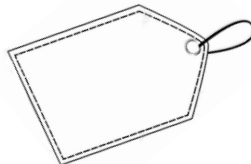
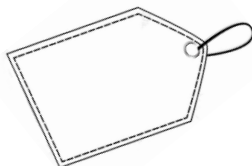
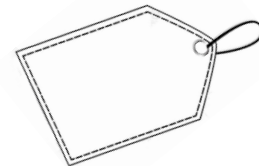
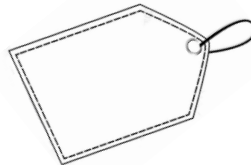
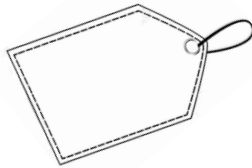
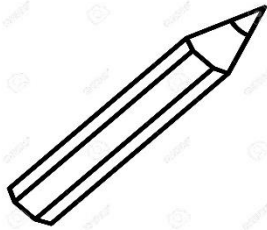
Class: I Sec : \_\_\_\_\_ Date: \_\_\_\_\_

**Q1. Match the following paper currency to their amount.**

1.		a.	50 RIALS
2.		b.	100 BAISA
3.		c.	1 RIAL
4.		d.	$\frac{1}{2}$ RIAL
5.		e.	10 RIALS

ANSWERS: 1. \_\_\_\_\_, 2. \_\_\_\_\_, 3. \_\_\_\_\_, 4. \_\_\_\_\_, 5. \_\_\_\_\_

Q2. Write the price of each item on the tag.





INDIAN SCHOOL AL WADI AL KABIR  
DEPARTMENT OF MATHEMATICS (2021-22)

TOPIC – MONEY

WORKSHEET -2

RESOURCE PERSON – Mrs. Savitha D'Souza

Name: \_\_\_\_\_

Class: I Sec: \_\_\_\_\_ Date: \_\_\_\_\_

Q1. Tick the box showing the correct amount of money for the given amount.

1. 1 RIAL



2. 20 RIALS

















3. 1/2 RIAL



4. 50 RIALS



Q2. Circle the correct currency note you will give the shopkeeper for the article shown.

1.	 <b>20 RIALS</b>	 <b>SPECIMEN</b>	 <b>SPECIMEN</b>
2.	 <b>1 RIALS</b>	 <b>SPECIMEN</b>	 <b>SPECIMEN</b>
3.	 <b>50 RIALS</b>	 <b>SPECIMEN</b>	 <b>SPECIMEN</b>
4.	 <b>5 RIALS</b>	 <b>SPECIMEN</b>	 <b>SPECIMEN</b>
5.	 <b>10 RIALS</b>	 <b>SPECIMEN</b>	 <b>SPECIMEN</b>